



Measure length (cm)

1 How long is the pen to the nearest centimetre?



The pen is cm long.

2 How tall is the doll to the nearest centimetre?



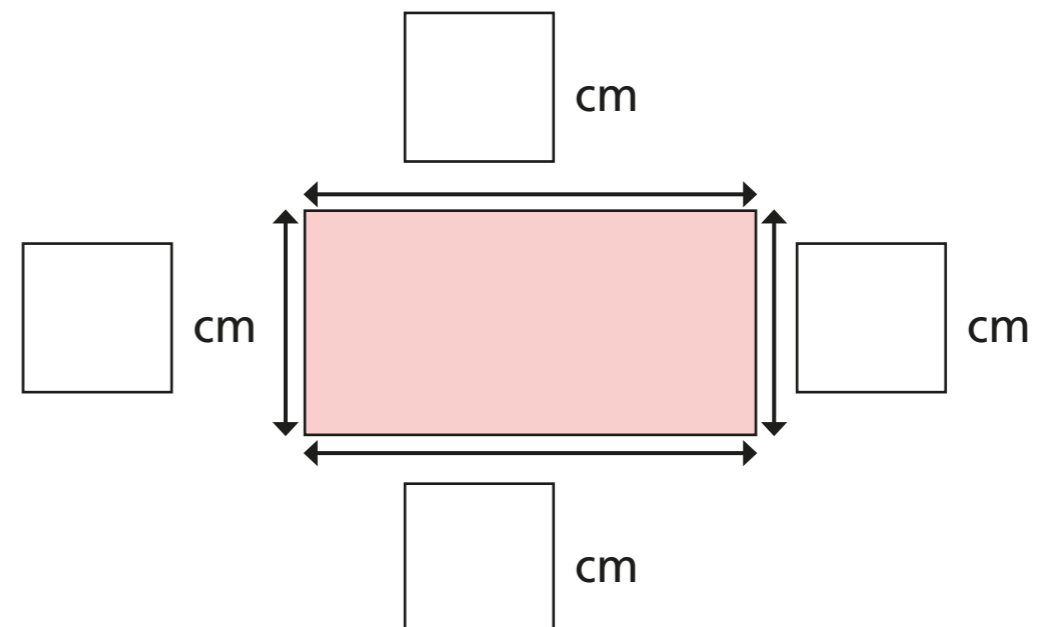
cm

3 Use a ruler to draw the lines.
a) 12 cm long


b) 7 cm long

c) 8 cm long

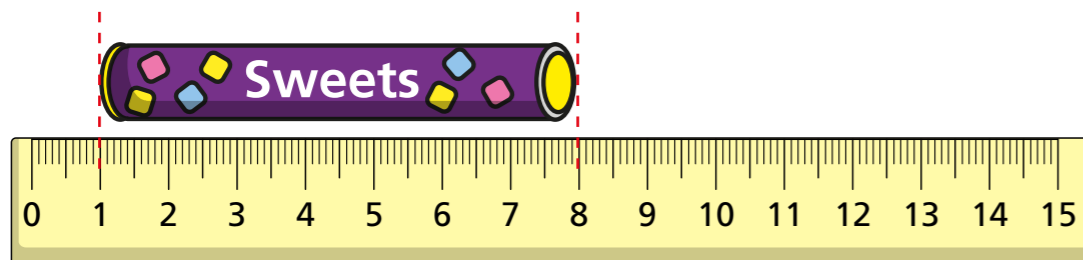
4 How long is each side to the nearest centimetre?
Measure and label the rectangle.



- 5 Rosie measures the length of a tube of sweets.



The tube is 8 cm long.



- a) Do you agree with Rosie? _____
Talk about it with a partner.

- b) How long is the tube to the nearest centimetre?
 cm




- 6 You cannot use a ruler to measure the line.



Why not? How could you measure it?




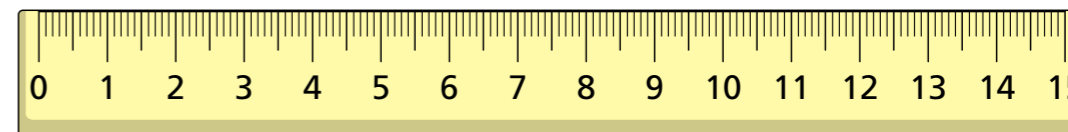
- 7 a) Draw a line that is between 6 cm and 9 cm long.



- b) How long is your line to the nearest centimetre?



- 8 Amir has a 15 cm ruler.



I cannot measure anything that is longer than 15 cm.

Is Amir correct? _____

How could he measure an object longer than 15 cm?

Talk to a partner.

