





Finding Perimeters of Shapes

Find as many different rectangles as you can that have a perimeter of 24cm. Draw each one carefully into your book, marking the length of each side and the total perimeter.



Measuring the length and width of rectangles using cm and mm.

Measure the length and width of each rectangle using a ruler. Use two different coloured crayons.

1. Record the length and width in cm.
2. Record the length and width in mm.

Draw some rectangles of your own into your book and show the length and width of each in cm and mm.

